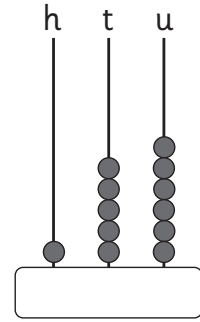
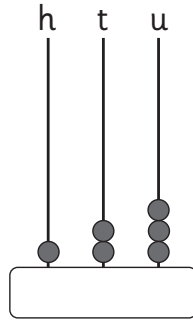
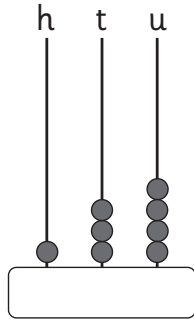


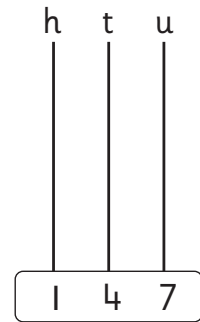


Topic 32. Place Value 2

Practice

1.



2. Draw.



3. How many hundreds, tens and units?

167 = hundred tens and units

190 = hundred tens and units

142 = hundred tens and units

136 = hundred tens and units

154 = hundred tens and units

4. 1 hundred, 3 tens and 8 units =

1 hundred, 8 tens and 4 units =

1 hundred, 6 tens and 0 units =

1 hundred, 2 tens and 9 units =

1 hundred, 1 ten and 5 units =

Name: _____ Date: _____